

Name: _____

Class: _____


ANGLES

Classify and measure the angles.

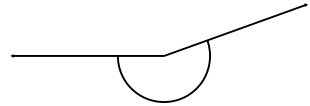
1.



2.



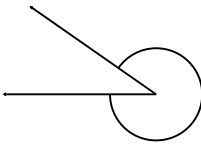
3.




4.



5.



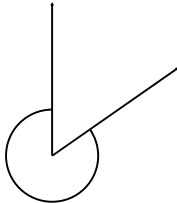
6.



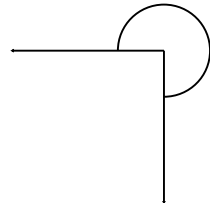
7.



8.




9.



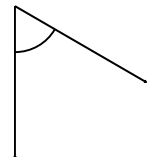
10.



11.



12.



Name: _____

Class: _____

ANGLES


Classify and measure the angles.

1.



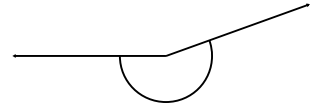
170° Obtuse

2.



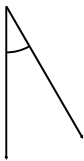
345° Reflex

3.



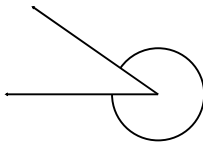
200° Reflex

4.




30° Acute

5.



325° Reflex

6.



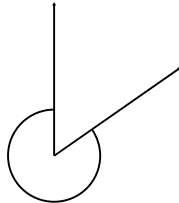
215° Reflex

7.



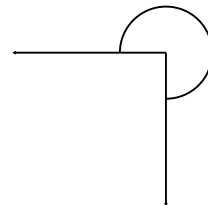
25° Acute

8.



305° Reflex

9.




270° Reflex

10.



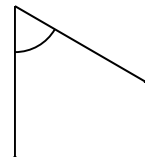
190° Reflex

11.



285° Reflex

12.



60° Acute